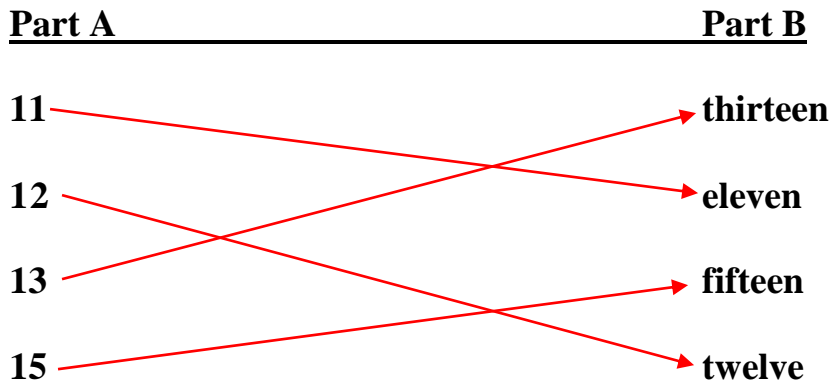


MATHS (Grade 2)

Fun with 2-digit numbers - ANSWERS

Match Part A to Part B



2.

In figures

In words

14	Fourteen
16	Sixteen
17	Seventeen
18	Eighteen
19	Nineteen

3.

Complete the empty boxes with the correct numerals

1	2	3	4	5	6	7	8	9	10
11	12	13	14	15	16	17	18	19	20
21	22	23	24	25	26	27	28	29	30
31	32	33	34	35	36	37	38	39	40
41	42	43	44	45	46	47	48	49	50
51	52	53	54	55	56	57	58	59	60
61	62	63	64	65	66	67	68	69	70
71	72	73	74	75	76	77	78	79	80
81	82	83	84	85	86	87	88	89	90
91	92	93	94	95	96	97	98	99	100

MATHS (Grade 2)

Fun with 2-digit numbers - ANSWERS

3. Write the **number names**

20 **Twenty**

23 **Twenty three**

28 **Twenty eight**

40 **Forty**

41 **Forty one**

45 **Forty five**

60 **Sixty**

62 **Sixty two**

66 **Sixty six**

80 **Eighty**

83 **Eighty three**

89 **Eighty nine**

30 **Thirty**

32 **Thirty two**

36 **Thirty six**

50 **Fifty**

54 **Fifty four**

59 **Fifty nine**

70 **Seventy**

78 **Seventy eight**

71 **Seventy one**

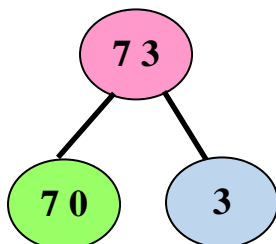
90 **Ninety**

95 **Ninety five**

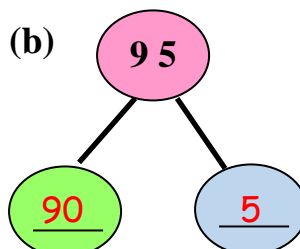
99 **Ninety nine**

4. Complete the following. One example has been done for you,

(a)



(b)



(c)

